

ALL SAINTS PUBLIC SCHOOL CHAYAM, VITHURA

ANNUAL EXAMINATION 2024 - 2025

Mathematics

Marks:- 50

Name:-

1 . Write the missing numbers. (4)

81 ____ ____ ____ ____
____ ____ ____ ____ 90

2. Put the correct symbol (> , < or =). (4)



(a) 44 ____ 22

(b) 60 ____ 63

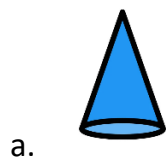
(c) 33 ____ 33

(d) 55 ____ 58

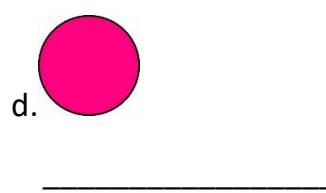

3. Count the objects and write the correct number. (5)



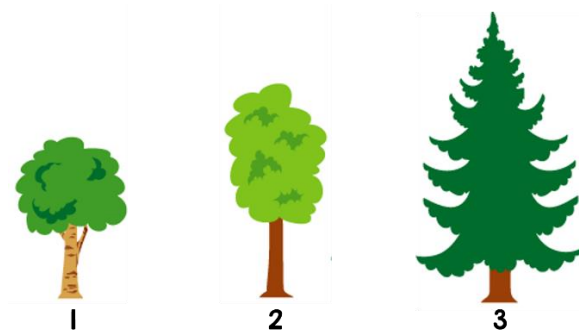
4. Write the names of the following shapes. (8)







5. Circle the tallest tree. (2)



6. Write the number names of the given numbers. (8)

5 _____
6 _____
7 _____
8 _____

7. Write the numbers from 91 to 100. (4)

91 _____ 100

8. Match the following. (8)

4 - ten
9 - three
10 - nine
3 - four

9. Arrange the numbers in order. (3)

43, 40, 42, 44, 41

10. Add the following numbers. (4)

a) 3 + 2 = _____

b) $4 + 5 = \underline{\hspace{2cm}}$