

ANNUAL EXAMINATION 2022 - 2023

Class : III

ENGLISH

Time : 2 hrs

Marks : 50

SECTION A READING

Read the following passage and answer the given questions. (5)

Kylie's Family

Kylie has a large family. She lives with four people. Kylie's mom is an artist. Kylie's mom works at the art studio. She makes paintings for people's houses.

Kylie's dad is a heart doctor. Kylie's dad works at the hospital. He helps people who are sick. Kylie has two brothers, Bobby and Daniel. Bobby is ten years old. Daniel is fourteen years old.

Kylie has two pets. Tommy is a small, white cat. Dobby is a large, black dog.

Kylie loves her family very much!

Answer the following questions:

1. How old is Daniel?

- (a) 10 years (b) 8 years (c) 13 years (d) 14 years

2. What kind of doctor is Kylie's dad?

- (a) Brain (b) Heart (c) Eye (d) Bone

3. What colour is Tommy?

- (a) Black (b) Brown (c) White (d) Grey

4. What is the passage focusing on?

- (a) Kylie's pets (b) Kylie's family (c) Kylie's parents (d) Kylie's brothers

5. Who is Tommy?

- (a) White cat (b) Black dog (c) Parrot (d) Brown dog

SECTION B WRITING

1. How is Independence Day celebrated in your school? Write a letter to your grandmother describing the Independence Day celebrations in your school. (5)

SECTION C GRAMMAR

Fill in the blanks with the correct pronouns from the brackets. (4)

1. This is Salma. _____ [She/It] is a pilot.

2. Rohit is hungry. _____ [She/He] wants a sandwich.

3. The Indian cricket team played very well. _____ [It/They] made us proud.

4.Can you lend _____ [me/I] a pencil?

Rewrite each pair of sentences as a single sentence. Use the conjunctions and, so, or, because or but. (4)

- 1.An eagle can fly. An ostrich cannot fly.
- 2.Charu is happy. Her cousins are visiting her today.
- 3.The school bell is about to ring. Let us walk fast.
- 4.Is a tomato a vegetable? Is a tomato a fruit?

Match the adjectives to their opposites (2)

- 1.Empty - Cold
- 2.Difficult - Late
- 3.Hot - Full
- 4.Early - Easy

Fill in the blanks with suitable words from the box. (3)

[sweetly, easily, softly]

- 1.Please speak _____.
- 2.Ravi solved the puzzle _____.
- 3.My aunt sang _____.

Write questions for given answers. (4)

- 1.My birthday is on 29 November.
- 2.I come to school by bus.
- 3.Mrs. Rao teaches us English.
- 4.I was late today because I missed my bus.

Complete these words with 'ee' or 'ea'. (5)

- 1.l _ _ f
- 2.Sh _ _ p
- 3.T _ _ cher
- 4.Br _ _ thing
- 5.K _ _ ping

SECTION D LITERATURE

Choose the correct answer.

(3)

1.The story 'Tara and Appu' is about:

- (a)a brave girl who helped a lost elephant
- (b)Children in a school playing with an elephant.

2. When Mr. Sun disappeared the water in the lakes and rivers:

- (a)froze
- (b)melted

3.Akbar was angry with the storytellers because their stories

- (a)came to an end
- (b)did not have an end

Write True or False

(3)

1.Nehruji asked Ramu to get mangoes for him every day.

2.Ramu was a kind and loving person.

3.Ramu was Nehruji's driver.

Match the columns.

(5)

1.Jawaharlal Nehru was - Ramu's love

2.The mangoes were - the first Prime Minister of India

3.Nehruji was touched by - sour and bitter

4.Ramu was – mangoes for Nehruji

5.Ramu brought – his helper in the jail

Complete these sentences.

(2)

1.Akbar couldn't sleep at night because he was _____.

2.The elephant escaped from a _____.

3.When Mr. Sun disappeared, the plant went to _____.

4.Sam found an _____ and took it to school.

Answer the following questions

(5)

1.What advice did the hakims give to the emperor?

2.Why did Clarence like living in the school?

3.Who was happy that the sun was taking a holiday? Why?

4.Where did Tara get the apples from?

5.Why did Ramu bring mangoes for Nehruji ?

ANNUAL EXAMINATION

STD:III

MALAYALAM

MARKS:50

I. ഖണ്ഡിക വായിച്ചു ഉത്തരമെഴുതുക

(5)

ഇന്ത്യയുടെ വടക്കേ അറ്റത്താണ് 'കാശ്മീർ' എന്ന സുന്ദര ഭൂമി.. സ്വർഗത്തേക്കാൾ സുന്ദരമാണ് കാശ്മീർ എന്ന് മഹാകവി കാളിദാസൻ വർണിക്കുന്നു. ഗൗരിമാർഗ്ഗ് എന്നാണ് കാശ്മീരിന്റെ പുരാണിക നാമം. കാശ്മീരിന്റെ വേനൽക്കാല തലസ്ഥാനം ശ്രീനഗർ ആണ്. ഇന്ത്യയിലെ ഒരു പ്രധാന വിനോദ സഞ്ചാര കേന്ദ്രമാണിത്.. കാശ്മീർ എന്ന സ്വർഗ്ഗഭൂമിയുടെ വെള്ളി അരഞ്ഞാണമാണ് ലിദർ എന്ന നദി.

1. ഇന്ത്യയുടെ വടക്കേ അറ്റത്ത് സ്ഥിതി ചെയ്യുന്ന സുന്ദരഭൂമിയേത്?
2. സ്വർഗത്തേക്കാൾ സുന്ദരമാണ് കാശ്മീർ എന്നു പറഞ്ഞ മഹാകവി ആര്?
3. കാശ്മീരിന്റെ പുരാണിക നാമമെന്ത്?
4. കാശ്മീരിന്റെ വേനൽക്കാല തലസ്ഥാനം ഏത്?
5. കാശ്മീർ എന്ന സ്വർഗ്ഗഭൂമിയുടെ വെള്ളിയരഞ്ഞാണം എന്നറിയപ്പെടുന്ന നദി?

II. ശരിയായ അർത്ഥം തിരഞ്ഞെടുത്തെഴുതുക

(5)

6. വിശ്വം - (ലോകം, സമാധാനം)
7. കുഞ്ചിതം - (ദുഃഖം, അറിവ്)
8. മാനം - (വെള്ളം, ആകാശം)
9. നേര് - (സത്യം, വെളിച്ചം)
10. വന്യമൃഗം - (വനത്തിലെ മൃഗം, നാട്ടിലെ മൃഗം)

III. ചേരുംപടി ചേർക്കുക

(5)

11. ഗീതാഞ്ജലി - നെറ്റിപ്പട്ടം
12. തെന്നാലിരാമൻ - സുഗതകുമാരി
13. വാഴക്കുല - രവീന്ദ്രനാഥ ടാഗോർ
14. നേരാണ് - വിദ്യുഷകൻ
15. ആന - ചങ്ങമ്പുഴ കൃഷ്ണപിള്ള

IV. വിപരീതമെഴുതുക

(2)

16. ഇണങ്ങുക
17. സുഖം
18. രഹസ്യം
19. സ്വാതന്ത്ര്യം

V. പര്യായമെഴുതുക

(4)

20. സ്വർണം
21. മഴ
22. സഞ്ചാരം

23. അമ്മ

VI. പിരിച്ചെഴുതുക

(4)

24. വടിയുന്നി

25. ഒന്നുമില്ല

26. ആനക്കൊമ്പ്

27. അറ്റത്താണ്

VII. ചേർത്തെഴുതുക

(2)

28. പണി + പാട്

29. തുമ്പി + കൈ

VIII. വിഗ്രഹിക്കുക

(2)

30. മഹാകവി

31. ദേശഭക്തി

IX. മാതൃക പോലെ എഴുതുക

(2)

മാതൃക :-നാട് - നഗരം - നാടും നഗരവും

32.

a)മല -പുഴ

b)മുറ്റം- തൊടി

33. വാഴക്കുല എന്ന കവിതയിലെ ആദ്യത്തെ എട്ടുവരി എഴുതുക

(5)

മലയപ്പുലയനാ.....

.....

X. വാക്യത്തിൽ പ്രയോഗിക്കുക

(2)

34. ആജ്ഞാനുവർത്തി

XI. ഉത്തരമെഴുതുക

(4x1=4)

35. ടാഗോർ വിശ്വമഹാകവിയായി അംഗീകരിക്കപ്പെട്ടതെപ്പോൾ?

36. തെന്നാലി രാമൻ കിണറ്റിലിട്ടതെന്ത്?

37. അഴകി വാഴയെ ഓമനിച്ചു വളർത്തിയതെങ്ങനെ?

38. കാശ്മീരിന്റെ അതിർത്തി സംസ്ഥാനങ്ങൾ ഏതൊക്കെ?

XII. രണ്ടോ മൂന്നോ വാക്യത്തിൽ ഉത്തരമെഴുതുക

(4x2=8)

39. ആന നമ്മുടെ ആഘോഷങ്ങൾക്കും ഉത്സവങ്ങൾക്കും പൊലിമയേറുന്നതെങ്ങനെ?

40. ഗ്രാമത്തിന്റെ ഗുണങ്ങൾ എന്തെല്ലാം?

41. അപ്പുപ്പന്റെ രൂപം വർണിക്കുക?

42. ദേശീയഗാനം കേൾക്കുമ്പോൾ നാം എങ്ങനെ നിൽക്കണം?

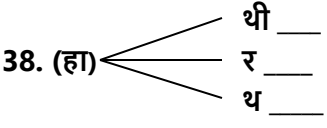
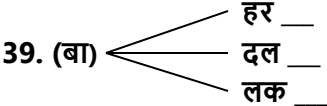
ANNUAL EXAMINATION

CLASS – 3

HINDI

MARKS – 50

- I. WRITE ENGLISH MEANING. (10)**
अंग्रेजी अर्थ लिखिए।
1. लोमड़ी -
2. दोस्त -
3. बंदर -
4. सुंदर -
5. मच्छर -
6. गुब्बारा -
7. चिडिया -
8. कुत्ता -
9. कमल -
10. खुश -
- II. WRITE SYNONYMS OF WORDS. (2)**
पर्यायवाची शब्द लिखिए।
11. हाथी -
12. पानी -
13. माँ -
14. खाना -
- III. JOIN THE LETTERS. (4)**
वर्ण जोड़कर लिखिए।
15. अ+तु+ल -
16. मा+ला -
17. बी+मा+र -
18. कू+डा+दा+न -
- IV. WRITE THE OPPOSITE WORDS. (2)**
विलोम शब्द लिखिए।
19. मोटा ×
20. छोटा ×
21. गरम ×
22. काला ×
- V. MATCH THE FOLLOWING. (7)**
सही अर्थ जोड़िए।
23. दाँत - Summer
24. सरदी - Hot wind
25. मूँह - Pond
26. गरमी - Rain
27. लू - Teeth
28. पोखर - Winter
29. बरसात - Mouth

- VI. CHANGE THE WORDS IN DOUBLE.** (2)
वचन बदलिए ।
(एक - अनेक)
30. गुब्बारा -
31. कुत्ता -
32. मछली -
33. चूहा -
- VII. CHANGE THE GENDER.** (2)
लिंग बदलिए ।
34. बेटा -
35. मोर -
36. मुरगा -
37. हंस -
- VIII. FRAME THE WORDS.**
अक्षर जोडिए ।
38. (हा)  थी ___
र ___
थ ___
39. (बा)  हर ___
दल ___
लक ___
- IX. FILL IN THE BLANKS WITH CORRECT WORDS.** (5)
दिए गए खाली जगह पर सही जवाब लिखिए ।
(गजू , लोमडी , नीमो , मजाक , नट्टू)
40. जंगल मे एक छोटी ___ रहती थी ।
41. लोमडी का नाम ___ था ।
42. नन्हे हाथी का नाम ___ था ।
43. बंदर का नाम ___ था ।
44. हमे किसी का ___ नही उठाना चाहिए ।
- X. ANSWER IN ONE WORD.** (2)
एक शब्द मे सही उत्तर दीजिए ।
45. हम किनसे देखते है ?
46. हम किनसे सुनते है ?
47. हम किससे सूँघते है ?
48. स्वाद चखने मे कोन मदद करता है ?
- XI. ANSWER IN ONE SENTENCE.** (4)
एक वाक्य मे उत्तर दीजिए ।
49. लू कब चलती है ?
50. बूँदे कब गिरती है ?

XII. WRITE NEATLY THREE TIMES.

(4)

तीन बार सुंदर से लिखिए ।

51. उपवन - __ , __ , __

52. पढना - __ , __ , __

53. सहेली - __ , __ , __

54. कूडादान - __ , __ , __

_____ * _____ * _____ * _____

ANNUAL EXAMINATION : 2022 – 2023

STD:III

MATHEMATICS

MARKS:50

I FILL IN THE BLANKS:

(5x1=5)

1. Four – seventh is written as -----.

2. $\frac{3}{8} + \frac{4}{8} =$ -----.

3. 1 year = ----- days.

4. 1 Litre = ----- milli Litre.

5. A rectangle has ----- sides.

II CHOOSE THE CORRECT ANSWER :

(5x1=5)

6. Ten rupees sixty paise =

a) ₹10.60 b) ₹60.10 c) ₹ 1.60

7. 5168m = -----

a) 51km 168m b) 516km 8m c) 5km 168m

8. 2 hours after 6.30 a.m.

a) 8.30 a.m. b) 8.30 p. m. c) 4.30 a.m.

9. 4, 8, 12, ---, ---

a) 13, 14 b) 16, 20 c) 15, 20

10. Equivalent fraction of $\frac{3}{7}$ is

a) $\frac{1}{3}$ b) $\frac{7}{3}$ c) $\frac{6}{14}$

III STATE TRUE OR FALSE :

(5x1=5)

11. A triangle has four sides.

12. There are 366 days in a leap year.

13. The pictorial representation of data is called pictograph.

14. 5 weeks = 150 days.

15. Quarter to 6 is 6.45.

III 16. WRITE THE TIME:

(2x1=2)



IV DRAW LINE SEGMENTS:**(2x1=2)**

17. 5cm 18.7cm

V CONVERT:**(5x1=5)**

19. 125cm = -----m -----cm

20. 4km = ----- m

21. 3490g = -----kg

22. 75L = -----mL

23. 7568mL = -----L

VI ADD THE FOLLOWING :**(5x1=5)**

24.	km	m	L	mL
₹ 45 60	278	109	164	755
+ ₹ 39 78	+ 425	756	+ 30	649
-----	-----	-----	-----	-----

m	cm	kg	g
125	05	60	158
+ 190	16	+ 46	069
-----	-----	-----	-----

VII SUBTRACT :**(5x1=5)**

25.	kg	g	m	cm
₹ 180. 56	743	350	875	13
- ₹ 198. 70	- 120	120	- 451	90
-----	-----	-----	-----	-----

L	mL	g	mg
788	125	980	654
- 34	125	- 450	165
-----	-----	-----	-----

VIII CONVERT :

(5x2=10)

26. 7 weeks = ----- days

27. 3 months= ----- days

28. 5 years = ----- months

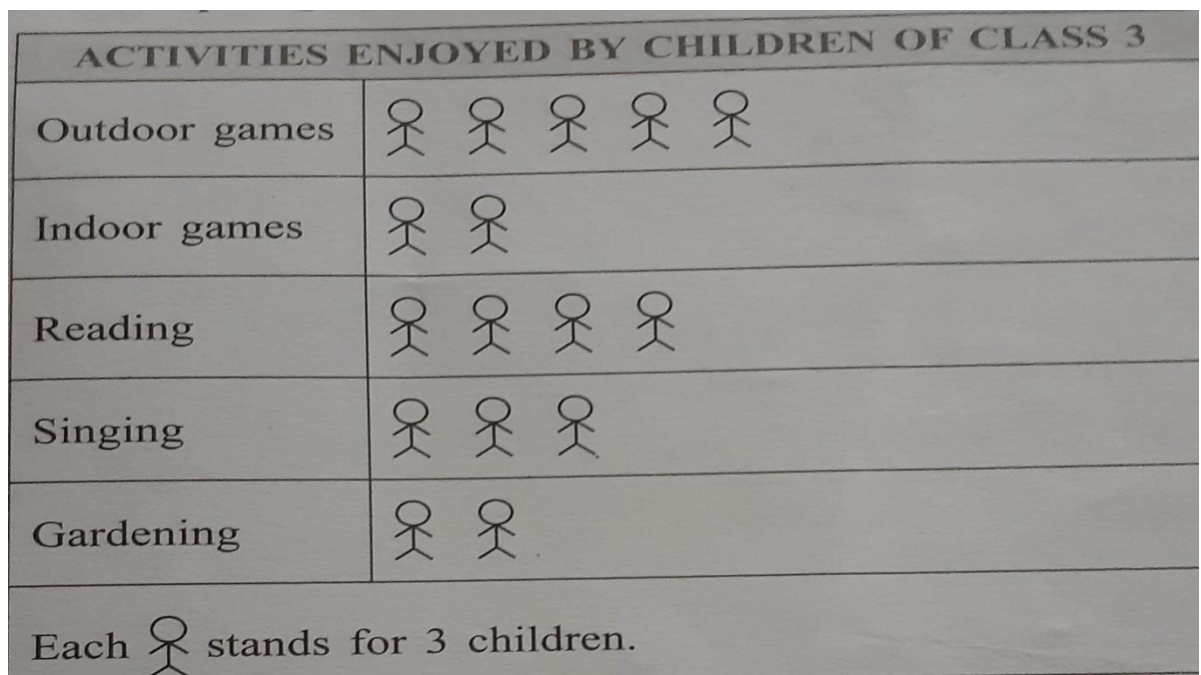
29.10 hours = ----- minutes

30. 6 days = ----- hours.

IX USE THIS PICTOGRAPH TO ANSWER THE QUESTIONS :

(3)

31.



- i) Which is the most popular activity?
- ii) Which activity is liked the most number of students?
- iii) How many children enjoy gardening?

X SOLVE THESE WORD SUMS :

(2x1.5=3)

32.A box of chocolates was priced at ₹102.75. During a monthly sale it cost was ₹11.90 less. What was the reduced cost?

33. Three containers have 7 L 550mL, 8L 250 mL and 9L 850mL of petrol respectively. How much petrol is there in these three containers?

Annual examination

Std - III

SCIENCE

Marks : 50

Very short answer (1×15=15)

1. To avoid accidents you must.....
A) not hit anyone B) fight for your turn C) follow safety rules
2. First aid should be given to an injured person
A) Immediately B) after one hour C) when she/he is fit
3. Dustbins should be kept covered to keep away
A) butterflies B) houseflies C) bees
4. This is a form of water
A) Ice cream B) iceberg C) rock
5. In India winter summer and rainy are the three main
6. This soil is sticky and mostly used for making pots and toys
A) Sandy soil B) clayey soil C) loam
7. The soil is best for plants
A) Clayey soil B) loam C) Sandy soil
8. The moon shines because it reflect the light of
A) The earth B) the sun C) other planets
9. Constellation are the patterns formed by
A) Planets B) stars C) moon
10. Humans first landed on the moon in the year
A) 1699 B) 1969 C) 1996
11. Astronauts wear special suits that contain supply of
A) Petrol B) water C) oxygen
12. This is the main source of light on earth
A) Candles B) moon C) Sun
13. Force can do
14. This is not a part of your environment
A) Your home B) your school C) the moon
15. Beyond the layer of the air surrounding the earth is
A) Soil B) space C) water

Fill in the blanks (1×5=5)

16. Cross the road at..... crossing
17. In nature too water exist in.....forms
18. Polluted water causes many
19. When we see more than half of the moon it is called
20. The light giving objects are called.....

True or False (1×5=5)

21. The rooms in a house should be airy and well-lit
22. First aid should be given to an injured person after 1 hour
23. The earth is one of the 8 planets in the solar system
24. Rotation of earth causes day and night
25. Sandy soil is best for plants

Match the following (1×5=5)

26. Heavy rain – drought
27. Strong wind – candle
28. Lack of rain – flood
29. Luminous object – bat
30. Non-luminous object – storm

Fill in the blanks (1×5=5)

31. Time taken for one rotation of the earth on its axis.....
32. Light travels in these straight line
33. This is formed when an object blocks the path of light.....
34. This is caused by an unpleasant sound
35. Second woman of Indian origin to go into space.....

Answer the following questions (2×5=10)

36. When did Kalpana Chawla first to go into space?
37. Who are astronomers?
38. How is water polluted?
39. What are different kinds of soil?
40. Write any two features of good house.

Think and answer (5)

41. Air is more polluted in cities than villages. Plants and trees make the air clean and fresh .How ?

ANNUAL EXAMINATION 2023

STD :3

SOCIAL STUDIES.

MARKS:50

I CHOOSE THE CORRECT ANSWER FROM BRACKETS

(7)

1. Where do we buy stamps and postcards from (Post office/ railway station)
2. (Pataliputra / Rajasthan) was the capital of Ashoka's Empire
3. Which of these animals will you see in desert (camel / Yak)
4. Most people in Bengaluru speak (Kannada / Malayalam)
5. Raas Garba is performed during (Onam / Navaratri)
6. Lucknow is famous for its ,(Kantha work / Chikan embroidery)
7. Which of these people use to surf the internet (magazine / laptop)

II WRITE 'TRUE ' OR 'FALSE'

(5)

1. The Mahanadi river flows through near Raipur
2. Vishakhapatnam is a port city
3. Early humans made rafts to travel on water
4. The postal service of our country is called ' India post
5. Kerala is popularly known as the 'Garden City ' of India

III MATCH THE FOLLOWING

(5)

- | | |
|------------------|------------------------|
| 1. Urgent parcel | a) to send an SMS |
| 2. Pigeons | b) reaches many people |
| 3. Mobile phone | c) early humans |
| 4. Radio. | d) send by speed posts |
| 5. Rafts | e) to carry messages |

IV Who am I ?

(3)

1. I am an environment friendly means of transport. People use me to travel short distance
2. I am where the road and the train track to meet
3. I am the 'ship of the desert '

V CIRCLE THE ODD ONE OUT.

(5).

1. Radio./ Television. / Telephone
2. Bus. / Ship / train
3. Bharatanatyam / Pongal / Kannada
4. Kovalam. / Pearl. / Charminar
5. Bengaluru. / Garden City / Telangana

VI Define the terms.

(5)

1. Personal communication
2. Fax
3. Land transport
4. PIN Code
5. Mass communication

VII. ANSWER THE FOLLOWING.

(7x2,=14)

- 1 How do we choose a particular vehicles to travel ?
- 2 Write three road safety rules
- 3 How did early humans communicate ?
- 4 What are the advantage of using an email ?
- 5 Why did Ashok decide never to fight any wars ?
- 6 How can a message be sent to a large number of people ?
- 7 Which festivals do people in Thiruvananthapuram celebrate ?

VIII CHOOSE CORRECT WORDS FROM THE BOX.

(6)

Telephone, fax. Post office. Radio mobile phone newspaper

PERSONAL COMMUNICATION

MASS COMMUNICATION

ANNUAL EXAMINATION (2022-23)
INFORMATION TECHNOLOGY

CLASS-III

Marks- 50

I. CHOOSE THE CORRECT ANSWER FROM THE BRACKETS. (10x1=10)

(Slide show, Word processor, Top, Home, Paint tool, Pen Paint, Open, + , File tab, PR)

1. _____ tool displays the different styles of brushes.
2. Title bar is present at the _____ of the screen.
3. To open a saved document click on the file tab ➡ _____.
4. The _____ command is used to write text in the window.
5. To calculate the, Addition _____ is operator is used.
6. The PPT stands for _____.
7. The save command is present under the _____ tab.
8. _____ is used to see all the scenes in a sequence.
9. M.S Word is a _____.
10. When you start Logo the turtle is at _____ position.

II. REARRANGE THE FOLLOWING. (5x1=5)

11. FAOM
12. GSSRA
13. IDRP
14. OWFLER
15. RASIL

III. Write YES OR NO for the following statement. (5x1=5)

16. Do not pull the mouse.
17. Clean the monitor with wet clothe.
18. Keep the monitor covered.
19. Do not waste paper.
20. Do not write on the shiny side of a CD/DVD.

IV. MATCH THE FOLLOWING. (5X1=5)

- | | | |
|---------|---|--------------|
| 21. PU | - | RIGHT |
| 22. PPT | - | PENPAINT |
| 23. RT | - | CLEAR SCREEN |
| 24. FD | - | PEN UP |
| 25. CS | - | FORWARD |

V. WRITE THE KEYBOARD SHORTCUT FOR THE FOLLOWING. (5X1=5)

26. UNDO -
27. SAVE -
28. OPEN -
29. REDO -
30. NEW -

VI. ANSWER THE FOLLOWING QUESTIONS.

31. Write the commands to print the following in Logo. (2X1=2)

- a) Hello
- b) India is my country

32. What is the use of magic tool? (2)

- 33. What is the use of FD command? (2)**
- 34. Name any two magic effects that do not work on a blank canvas. (2)**
- 35. What is the use of PE commands? (3)**
- 36. Which command will you use to add five numbers? (3)**
- 37. What is the difference between CS and CT commands? (3)**
- 38. What is Logo turtle? Name its two parts. (3)**

ANNUAL EXAMINATION-2023-2024

CLASS:III

GK

MARKS :50

I.Fill in the blanks using correct options from the brackets. (10)

1. ----- is used to make mats,mattresses and ropes . (Coconut husk, Coconut wood)
2. ----- is a Wind instrument
(flute , sitar)
- 3.The rows of keys that has numbers,letters and symbol.
(Taskbar , Keyboard)
- 4.Light bulb is invented by -----
(Thomas Alva Edison, Willis Carrier)
5. ----- is the Second largest country in the world.
(Japan, Canada)
6. ----- is a popular Mexican dish
(Sandwich , Taco)
7. ----- is used to view faraway objects
(Telescope , Microscope)
- 8.The tree grows in coastal areas.
(Pine tree, Coconut tree)
- 9.A dice have ----- sides
(five , six)
- 10.The Rock Garden is in -----
(Punjab , Chandigarh)

II.Match the following (6)

- 11.Brazil - Computer
- 12.Shreya Ghoshal - Smallest country
- 13.Saina Nehwal - Football
- 14.Albert Einstein - Singer
- 15.Vatican city - Badminton
- 16.Mouse - Scientist

III.Circle the odd one (4)

17. a)Mridangam Tabla Veena Dhol
b)Tennis Football Badminton Kathakali
c)Reduce Reuse Swimming Recycle

d) Monitor House UPS CD

IV.18. Complete these words. Choose from the bracket. (4)

- a) ---- ---- u m
 - b) ---- ---- o g
 - c) ---- ---- o c k
 - d) ---- ---- u s h
- (b r , c l , d r , f r)

V. Find out the pair word. (5)

19. Up or -----

20. Lock and -----

21. Shoes and -----

22. read and -----

23. Cup and -----

(Saucer , write , socks , down , key)

VI.24. Identify the dance form and write their names. (5)



VII. Answer the following. (16)

- 25. Write the names of any four animals.
- 26. Write any four parts of computer?
- 27. Write any two string instruments?
- 28. Write the names of any two sports persons?
- 29. How many arms does an octopus have?
- 30. How many sides are there in pentagon?
- 31. Which country does Angelo Mathews play cricket?
- 32. Which country is famous for Windmills?