

## ANNUAL EXAM 2022-23

Std:2

ENGLISH

MARKS:50

### (Section- A)

#### I. Read the passage and answer the questions that follow:-

It was a very hot day. The children were sitting in the park. Raju was reading a story book. Mona was playing with a ball. Mother was looking after the baby. Raju's friend Hari was also there. His puppy Kittu was also there. Kittu was black in colour. They all are sitting under the shade.

#### Choose the correct word from the bracket and fill up the blanks:- (1x6=6)

1. It was a \_\_\_\_\_ day.  
( cold, hot)
2. The children were sitting in the \_\_\_\_\_ ( park / school).
3. \_\_\_\_\_ (Raju / Monu) was reading a story book.
4. Mother was looking after the \_\_\_\_\_ (baby / dog) .
5. Raju's friend was \_\_\_\_\_  
( Tomy, Hari) .
6. The puppy was \_\_\_\_\_ in colour ( white / black) .

#### II. Look at the picture and write one sentence each for it:- (1x4=4)



7. \_\_\_\_\_



8. \_\_\_\_\_



9. \_\_\_\_\_



10. \_\_\_\_\_

**(Section- B)**

**III. Answer the following :- (1x6=6)**

11. What did Pitpat see in the sky?
12. Who was Varun?
13. Who was Varun's friend?
14. What did Karan name the bird?
15. What did Robin Redbreast and Jenny Wren do ?
16. Why did John go to the Jungle?

**IV. Choose the correct answer:- (1x6=6)**

17. The swing goes up the air and over the \_\_\_\_\_ ( wall / hall).
18. John was a \_\_\_\_\_ (kind / bad) boy .
19. Varun and Arif played together \_\_\_\_\_ ( everyday / one day) .
20. Papa took the bird to the Bird \_\_\_\_\_ ( hospital/ school).
21. Pitpat was a \_\_\_\_\_ ( raindrop / wave) .
22. Pitpat met \_\_\_\_\_ ( Dripdrop / flowerdrop).

**V. Write T for True and F for False:- (1x5=5)**

23. The large drops became heavy.
24. Karan's father did not like cooking.
25. Karan's Dadi made mint chutney.
26. John's bucket was empty.
27. The two birds are Robin Redbreast and Jenny Wren.

**VI. Write a rhyming word:- (1x2=2)**

28. Till – \_\_\_\_\_
29. Dong – \_\_\_\_\_

**(Section- C)**

**VII. Fill in the blanks with and / or:- (1x2=2)**

30. Are you a boy \_\_\_\_\_ a girl.
31. Put your socks \_\_\_\_\_ shoes.

**VIII. Make a word train. Write a word that begins with the last letter of the word before it:- (1x2=2)**

32. Blue \_\_\_\_\_ → \_\_\_\_\_ → \_\_\_\_\_.

33. Water \_\_\_\_\_ → \_\_\_\_\_ → \_\_\_\_\_.

**IX. Write the full forms of short forms:- (1x2=2)**

34. isn't –

35. didn't –

**X. Circle the things you can touch:- (1)**

36. bad kindness idea banana

**XI. Write the opposites:- (1x2=2)**

37. near –

38. hot –

**XII. Rewrite these sentences. Begin with a capital letter and end with a full stop :- (1x2=2)**

39. i will go there

40. honesty is the best policy

**XIII. Add 'ly' to the words and rewrite the word :- (1x2=2)**

41. quick –

42. loud –

**XIV. Add a word to each group of words:- (1x2=2)**

43. Pigeon crow swan \_\_\_\_\_

44. Apple orange guava \_\_\_\_\_

**XV. Match the following:- (1x3=3)**

45. A baker                      sells flowers.

46. A doctor                     bakes cakes.

47. A florist                     treats the sick.

**XVI. Make a short word from these:- (1x3=3)**

48. Carpet –

49. Teacher –

50. Rainbow –

---

ANNUAL EXAMINATION 2022-23

STD 2

MALAYALAM

MARK : 50

I) താഴെ കൊടുത്തിരിക്കുന്ന കവിത വായിച്ച് ചോദ്യങ്ങൾക്ക് ഉത്തരം എഴുതുക. (4)

പൂവുകൾ തേടും പൂമ്പാറ്റ  
പൂന്തേൻ ഉണ്ണും പൂമ്പാറ്റ  
പൂമ്പൊടി വീശും പൂമ്പാറ്റ  
പൂവിലുറങ്ങും പൂമ്പാറ്റ

- 1) പൂവുകൾ തേടുന്നതാര്? \_\_\_\_\_
- 2) പൂമ്പാറ്റ എന്താണ് ഉണ്ണുന്നത്? \_\_\_\_\_
- 3) പൂമ്പൊടി വീശുന്നതാര്? \_\_\_\_\_
- 4) പൂമ്പാറ്റ എവിടെയാണ് ഉറങ്ങുന്നത്? \_\_\_\_\_

II) ശരിയായ അർത്ഥം എഴുതുക. (5)  
( ആകാശം, തെങ്ങ്, വള്ളം, തല, വള്ളി)

- 5) തോണി --
- 6) വല്ലി --
- 7) വിണ്ണ് --
- 8) കേരം --
- 9) ശിരസ്സ് --

III) പര്യായപദം എഴുതുക. (6)

- 10) ശരീരം = \_\_\_\_\_, \_\_\_\_\_
- 11) വെള്ളം = \_\_\_\_\_, \_\_\_\_\_
- 12) ആന = \_\_\_\_\_, \_\_\_\_\_

IV) വിപരീതം ചേർത്തെഴുതുക. (5)

- 13) ശരി - അകലെ
- 14) ശീതളം - പരാജയം
- 15) അടുത്ത് - തെറ്റ്
- 16) വിജയം - അമിതം
- 17) മിതം - ഉഷ്ണമൂലം

V) പിരിച്ചെഴുതുക. (4)

- 18) ശരിയുത്തരം =
- 19) പറന്നമ്മേ =
- 20) നിറ മേകി =
- 21) നിനക്കുണ്ണി =

VI) വാർമഴവില്ലേ മായല്ലേ എന്ന കവിതയിലെ ആദ്യത്തെ നാല് വരി കവിത എഴുതുക. (4)

22) വാർമഴവില്ലേ, വന്നാലും

\_\_\_\_\_

\_\_\_\_\_

\_\_\_\_\_

VII) ശരി ഉത്തരം എഴുതുക. (4)

( ചക്രം , ഇളനീർ , ബീർബൽ, കേരങ്ങളുടെ)

23) തെങ്ങു നൽകുന്ന ശീതള പാനീയമാണ് \_\_\_\_\_

24) അക്ബർ ചക്രവർത്തിയുടെ സന്തത സഹചാരിയായിരുന്നു \_\_\_\_\_

25) \_\_\_\_\_ കണ്ടുപിടിച്ചതോടെ എല്ലാറ്റിനും മാറ്റമുണ്ടായി.

26) കേരളം \_\_\_\_\_ നാടായിരുന്നു.

VIII) പദങ്ങൾ എഴുതുക. (4)

27) ' ശ ' ചേർന്നു വരുന്ന രണ്ട് പദങ്ങൾ .

\_\_\_\_\_ , \_\_\_\_\_

28) ' ഷ ' ചേർന്നു വരുന്ന രണ്ട് പദങ്ങൾ.

IX) ഉത്തരം എഴുതുക. (10)

29) ഏതെല്ലാം മൃഗങ്ങളെയാണ് സഞ്ചാരത്തിന് ഉപയോഗിക്കുന്നത്?

30) വല്ലിയിൽ നിന്ന് പറന്നതാർ ?

31) ഇളനീരിൽ എന്തെല്ലാമുണ്ട്?

32) മഴവില്ലിനോട് എവിടെ ഇരിക്കാനാണ് പറയുന്നത് ?

33) രാജ്യത്തെ ജനതയെ വിറപ്പിച്ച രാക്ഷസന്റെ പേര്?

X) ചിത്രം നോക്കി പേര് എഴുതുക (4)

34) \_\_\_\_\_ 35) \_\_\_\_\_



\_\_\_\_\_



ESAPARTEIA - moa .Botanisturf

\_\_\_\_\_

ALL SAINTS PUBLIC SCHOOL

STD II

HINDI

MARKS. 50

1. गद्य खंड पढ़कर उत्तर लिखो।

(10)

एक बार दो मित्र थे। उनके नाम राघव और धामु थे। वे दोनों एक साथ पढ़ते थे और लिखते थे। एक दिन वे जंगल से होकर जा रहे थे। रास्ते में उन्हें एक रीछ दिखाई दिया।

1. एक बार कितने मित्र थे?

2. उनके नाम क्या थे?

3. वे दोनों एकसाथ क्या करते थे?

4. वे कहाँ से होकर जा रहा था?

5. रास्ते में उन्हें क्या दिखाई दिया?

II. कोष्ठक से उत्तर चुनकर लिखो।

(5)

6. प्यासा कौन था?

(कौआ, कबूतर, घोड़ा)

7. घड़े में कितना पानी था?

(अधिक, कम, बहुत अधिक)

8. कौए ने घड़े में क्या डाला?

(जल, रेत, कंकड़)

9. पेड़ पर कौन सा मित्र चढ़ा?

(राघव, धामु, कोई नहीं)

10. कितने मित्र थे?

(तीन, चार, दो)

III. मिलान करो।

(10)

11. धूप ear

12. कान sunlight

13. पानी two

14. कौआ friend

15. दो water

16. मित्र crow

17. जंगल bear

18. पेड़ hope

19. रीछ forest

20. आशा tree

IV. अक्षरों में लिखो । (10)

21. "एक " से "दस " तक लिखो ।

V. पूरा करो । (10)

22. क का --- की -----कू -----के -----को -----कं -----

23. प -----पि -----पु -----पृ ----- पै -----पौ पं -----

VI. नीचे लिखे शब्दों को तीन बार सुंदर लिखावट में लिखो । (5)

24. गडरिया -----

25. चाल -----

26. उडाया- -----



## ANNUAL EXAMINATION 2023

**STD :2**

**ENVIRONMENTAL STUDIES.**

**MARKS: 50**

I CHOOSE THE CORRECT ANSWER FROM RACKETS.

(5)

1. We should not play with( friends / electric wires)
2. (Climbers / trees )need support to grow straight
3. (Hen / sheep )gives us eggs
4. We use heaters in ( winter /spring )
5. There are ( one / four ) types of pollution

II WRITE 'T' FOR TRUE AND 'F' FOR FALSE SENTENCES.

(5)

1. Big and tall plants are called trees -
2. A dog is a pet animal. -
3. Autumn comes after monsoon -
4. Elephants are used in desert. -
5. Cross a road at the Zebra crossing -

III MATCH THE FOLLOWING.

(5)

- |              |   |                    |
|--------------|---|--------------------|
| 1 Bus        | - | railway station    |
| 2 Train.     | - | Ship of the desert |
| 3 Ship.      | - | bus stop           |
| 4 Aeroplane. | - | Port               |
| 5 Camel      | - | Airport            |

IV WRITE 'L' FOR LAND POLLUTION , 'A' FOR AIR POLLUTION, 'W' FOR WATER POLLUTION AND 'N' FOR NOISE POLLUTION

(4)

1. Washing clothes in river –
- 2 Smoke from burning fire –
- 3 Garbage thrown on the road –
- 4 Playing loud music.

V CIRCLE THE ODD ONE OUT.

(4)

- 1 Car. Boat. Bus.
2. Ship. Boat. Aeroplane
3. Helicopter. Bullock cart. Rocket
4. Camel. Mule. Train

VI FILL IN THE BLANKS. (3)

1. When children burst fire crackers, it cause ----- pollution
- 2 Aslam has to reach another country quickly -----
- 3 Do not get off a ----- bus

VII NAME THE FOLLOWING (4)

1. Name two wild Animals –
2. Name two natural things –
3. Write the names of two animals that eat grass –
4. Name two water transport -

VIII ANSWER THE FOLLOWING. ( 7x2=14)

1. What is pollution ?
2. Which animals are used as means of transport ?
3. Write two safety rules to be followed on the road.
4. Write the names of the five seasons.
5. Write the names animals that live in jungles.
6. What causes air pollution
7. How do people keep themselves cool in summer?

IX CHOOSE THE WORDS FROM THE BOX.WRITE THEM IN THE CORRECT COLUMNS. (6)

Snow fall raincoat. woollens May. Paperboats.  
August. Cotton clothes. January. Hot winds.

SUMMER	WINTER	Monsoon
--------	--------	---------

**ANNUAL EXAMINATION 2023-24**

**STD:II**

**MATHS**

**MARKS:50**

**I. CHOOSE THE CORRECT ANSWER FROM THE BRACKETS**

**(5)**

[400, 5, 4, 28, 10]

1.  $4 \times 7 =$

2.  $10 \div 2 =$

3.  $4\text{m} = \_\_\text{cm}$

4.  $2 \times 5 =$

5.  $20 \div 5 =$

**I. FILL IN THE BLANKS**

**(5)**

1. Pictorial representation of a list is called a \_\_\_\_\_ ( list, pictograph)

2. One kilogram has \_\_\_\_\_ grams (100, 1000)

3. Small lengths are measured in \_\_\_\_\_ (m, cm)

4. The symbol of rupee is \_\_\_\_\_ (\$, ₹)

5. A year has \_\_\_\_\_ months ( 10,12)

**II. MATCH THE FOLLOWING THAT HAVE THE SAME ANSWER**

**(5)**

1.  $3 \times 4$  -  $6 \times 2$

2.  $8 \times 5$  -  $6 \times 1$

3.  $6 \times 3$  -  $8 \times 3$

4.  $3 \times 2$  -  $9 \times 2$

5.  $6 \times 4$  -  $10 \times 4$

**III. WRITE TRUE OR FALSE**

**(5)**

1.  $10 \times 4 = 4 \times 10$

2. 8 multiplied by 0 is 8

3. The answer in division is called dividend

4. Equal parts of a whole object are called fractions

5. The shortest month is February

**IV. CONVERT INTO CENTIMETRES**

(5)

1. 20m=
2. 25m=
3. 4m 70cm=
4. 8m=
5. 3m 60cm=

**V. WRITE IN RUPEES AND PAISE**





(5)

1. 665p = ₹\_\_ and \_\_ p
2. 705p = ₹\_\_ and \_\_ p
3. 275p = ₹\_\_ and \_\_ p
4. 500p = ₹\_\_ and \_\_ p
5. 990p = ₹\_\_ and \_\_ p


**VI. WRITE THE NAMES OF THE MONTHS THAT HAVE 30 DAYS**


(2)

Read the pictograph and answer the questions.


Treats at the Bakery	
cupcakes	
pies	
cookies	
cake	


How many treats are there?

1. 

2. 





---

3. 

4. 





---

5. Which treat has the most?

---

6. Which treat has the least?

---

7. How many cupcakes and cookies are there altogether?

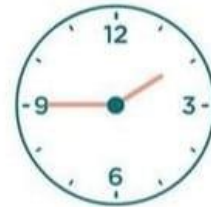
VII.

## WHAT TIME IS IT?

Look and match.



half past eleven



half past eight



four o'clock



a quarter past twelve



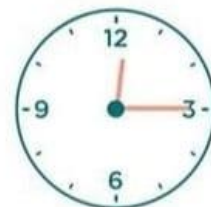
a quarter to two



a quarter past nine



a quarter to seven



one o'clock

VIII

### IX. SOLVE THESE WORD SUMS

(5×2=10)

1. Tina bought 40m of cloth and used 36m and 65cm of it.. How much cloth is left with her?
2. Arun collects the eggs puts 10 eggs in 5 trays.. How many eggs has been collected in all?
3. Balu has covered 25m 29cm of the 83m 15cm long bridge. How much distance is left?
4. Mary had ₹100. She bought two books for ₹40. How much money is left with her?
5. Write 12 months of a year.

**NAME :** \_\_\_\_\_ **ROLL NO.** \_\_\_\_\_ **DIV.** \_\_\_\_\_

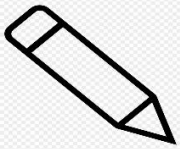

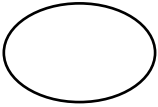

**I. CHOOSE THE CORRECT ANSWER FROM THE BRACKETS. (10x2=20)**

1. The top part of the paint window is called \_\_\_\_\_. (Cursor/Ribbon)
2. Pressing the left mouse button twice quickly is called \_\_\_\_\_. (Click /Double click)
3. \_\_\_\_\_ tool help us to draw different shapes in paint. (Eraser tool/Shapes tool)
4. You can select colour 1 and colour 2 from the \_\_\_\_\_ group.(colour /Shapes)
5. \_\_\_\_\_ is an example of brush style. (No fill / Air brush)
6. \_\_\_\_\_ tool is used fill in the shape. (Brush / Fill with colour)
7. \_\_\_\_\_ is a program used to type on a computer. (Paint /Word pad)
8. We use mouse to \_\_\_\_\_ (Jumping / drawing )
9. \_\_\_\_\_ tool closes Tux paint window. (Exit / save)
10. \_\_\_\_\_ tool helps to choose a blank page. ( Eraser tool/New tool)

**II. FILL IN THE MISSING LETTERS. (5x1=5)**

11. CUR \_ \_ OR
12. TEX \_ \_
13. CO \_ \_ OUR
14. WIRELES \_ \_
15. MOU \_ \_ E

**III. IDENTIFY THE FOLLOWING PAINT TOOLS AND WRITE THE NAMES. (4X2=8)**

16.		-	_____
17.		-	_____
18.		-	_____
19.		-	_____

**IV. Write YES OR NO for the following statement. (5x1=5)**

- 20. We use pencil tool to draw on the drawing area. \_\_\_\_\_
- 21. Do not eat or drink in front of the computer. \_\_\_\_\_
- 22. Scrolling means rolling the scroll wheel up and down. \_\_\_\_\_
- 23. We use magic tool to add different magic effects. \_\_\_\_\_
- 24. We use quit tool to open a new window. \_\_\_\_\_

**V. MATCH THE FOLLOWING . (5X1=5)**

- |                 |                               |
|-----------------|-------------------------------|
| 25. Text tool   | - Save a document             |
| 26. Open tool   | - Different styles of brushes |
| 27. Save tool   | - helps to type text          |
| 28. Eraser tool | - Open a saved document       |
| 29. Paint tool  | - Erase a mistake             |

**VI. ANSWER THE FOLLOWING QUESTIONS.**

30. What is scrolling? (1)

Ans. \_\_\_\_\_  
\_\_\_\_\_

31. Name any two brush styles in paint? (1)

Ans. \_\_\_\_\_

32. Which button displays a menu of options? (1)

Ans. \_\_\_\_\_

33. What is click? (2) Ans. \_\_\_\_\_

\_\_\_\_\_  
\_\_\_\_\_

34. How do you save a picture in paint? (2)

Ans. \_\_\_\_\_  
\_\_\_\_\_

**ANNUAL EXAMINATION 2023-24**

**STD:II**

**GK**

**MARKS:50**

**I.CHOOSE THE CORRECT ANSWER**

**(5)**

- 1)A musical instrument (sitar, calculator)
- 2)To take a photograph, we need \_\_\_\_ (binoculars, camera )
- 3)Hide and seek is a \_\_\_\_ ( game, sport )
- 4)A tool used to cut nails (toaster, nail cutter )
- 5)Red Fort is in \_\_\_\_ (Delhi, Mumbai )

**I. MATCH THE FOLLOWING**

**(5)**

- 1)Poha                -Odisha
- 2)Pongal            -cricketer
- 3)Odissi             -breakfast
- 4)R.Ashwin         -children's author
- 5)Ruskin Bond     -Tamil Nadu

**II. TRUE OR FALSE**

**(5)**

- 1)We use telescope for bird watching
- 2)for doing calculations, we need calculator
- 3)Pongal is a popular festival in Kerala
- 4)Our shadow will be the shortest in the after noon
- 5)Ruskin Bond is a cricketer

**III. WRITE THE NAME OF THE FOLLOWING**

**(5)**

- 1)An animal with a long neck
- 2)An instrument used to measure the body temperature
- 3)A game where rope is used to jump
- 4)An indoor sport with 32 pieces
- 5)A tool used to cut nails



**IV. WRITE THE CORRECT ANSWERS FROM THE BOX (5)**

[banana, begin, play ground, seven, red sand stone ]

- 1)Where do we play Cricket?
- 2)Red Fort is made of \_\_\_\_
- 3)Which word means the same as start?
- 4)Which fruit do you peel before eating?
- 5)How many months have 31 days?

**V. ONE WORD IS DIFFERENT IN EACH GROUP. CIRCLE THAT WORD (3)**

- 1)pay, say, boy, lay
- 2)tall, call, ball, sail
- 3) van, tin, fan, can

**VI. WRITE THE NAMES OF ANY THREE CHILDREN'S STORY BOOK (6)**

**VII. WRITE ANY THREE GAMES (6)**

**VIII. WRITE ANY THREE SPORT ITEMS (6)**

**X.WRITE ANY TWO POLITE WORDS (4)**