

ANNUAL EXAM 2022 - 2023

Std:1

ENGLISH

MARKS:50

(Section- A)

I. Read the passage and answer the questions that follow:-

My house

I have a pet. It is a cute little rabbit. It plays with me . It sleeps under the table. It is white in colour. Chikky is its name. It hops and runs after the butterflies.

Choose the correct word from the bracket and fill up the blanks:- (1x6=6)

1. I have a _____.
(bus, pet)
2. It is a cute little _____.
(horse / rabbit)
3. It sleeps under the _____ (table / tree).
(Kitchen, bathroom, bedroom)
4. It is _____
(black / white) in colour.
5. _____ is its name.
(Chikky, Tomy)
6. It _____. (hops / jumps)

II. Look at the picture and answer the questions that follows:- (1x4=4)



7. What do you see in the picture?
_____.
8. How many children are there?
_____.
9. What is the colour of the tree?
_____.
10. Is there a flag?
_____.

(Section- B)

III. Choose the correct answer :- (1x6=6)

11. Who dressed up as a zebra?
 - a. Kirti
 - b. Fatima
12. Who went to school by bus?
 - a. Ben
 - b. Rani
13. What did the birds do when the cages were opened?
 - a. They were sad.
 - b. They flew away happily.
14. What is Tony looking for?
 - a. Food.
 - b. Animals .
15. What does the prince want?
 - a. Moon.
 - b. Sun.
16. Where do Arun and Tara live?
 - a. In a village.
 - b. In a park.

IV. Choose the correct answer:- (1x6=6)

17. The village school does not have _____ (buses / train).
18. Tony is _____ (hungry / happy) .
19. I use my _____ (hands /eyes) to clap.
20. The bird sings a _____ (rhyme / song).
21. Alex and Anna walked to the _____ (pet/ vegetable) shop .
22. I use my _____ to read. (eyes, nose).

V. Write T for True and F for False:- (1x6=6)

23. The children are getting ready for Sports Day.
24. Ben is wearing brown pyjamas and jacket.
25. Ben, Fatima and Kirti are looking sad.
26. Alex and Anna wanted a toy.
27. Tony catches a fish.
28. I use my brain to think.

VI. Write a rhyming word:- (1x2=2)

29. Mat _____

30. Hen _____

(Section- C)

VII. Circle the correct describing word:- (1x2=2)

31. (Red / Loud) rose

32. (Brown / Blue) dog.

VIII. Write the names of these people:- (1x2=2)

33. A person who grows vegetables is called a _____.

34. A person who makes pots is called a _____.

IX. Write the many words:- (1x2=2)

One – many

35. Bench –

36. Glass –

X. Join two words to make a new word:- (1x2=2)

37. Sun + Flower = _____.

38. Water + Melon = _____.

XI. Add 'ed' to the words:- (1x2=2)

39. Brush –

40. Pack –

XII. Add 'ing' to the words:- (1x2=2)

41. Cook –

42. Drink-

XIII. Fill in the blanks with a or an :- (1x2=2)

43. ___ orange

44. ___ mango

XIV. Tick the correct answer:- (1x2=2)

45. The wind blows / flies.

46. The sun cries / shines.

XV. Match the words that rhyme together:- (1x4=4)

47. Catch race

48. Eat match

49. Bat seat

50. Place mat

ANNUAL EXAMINATION 2022-23

STD 1

MALAYALAM

MARK: 50

I) ചിത്രം നോക്കി പേര് എഴുതുക. (4)



1)



2)

3)



4)



II) അക്ഷരം ചേർന്നു വരുന്ന രണ്ട് വാക്ക് വീതം എഴുതുക. (10)

5) പ = _____ , _____

6) മ = _____ , _____

7) ഉ = _____ , _____

8) റ = _____ , _____

9) ര = _____ , _____

III) പുരിപ്പിക്കുക. (6)

10) ച ____ നം (ന,ന്ത)

11) ഇ ____ നം (ന്ത,ന്ധ)

12) മ ____ ണ്ങ (ത്ത,ത)

13) പ ____ രം (മ്പ,പ്പ)

14) അ ____ (മ,മ്മ)

15) പ ____ വ (റ,ര)

IV) ചേർത്തെഴുതുക. (5)

16) ക്ക ചെണ്ട

17) ബ്ബ പച്ച

18) ണ്ണ കാക്ക

19) ച്ച ഇഞ്ചി

20) ണ്ണ മഞ്ഞ

V) ശരി ഉത്തരം എഴുതുക. (5)

21) കേരളത്തിന്റെ ഔദ്യോഗിക വൃക്ഷം ഏത്?

(മാവ് , തെങ്ങ്)

22) മാവിൽ ഉണ്ടാകുന്ന പഴം

(ചക്ക , മാങ്ങ)

23) കേരളത്തിന്റെ ഔദ്യോഗിക ഫലം

(ചക്ക , തേങ്ങ)

24) തെങ്ങിൽ _____ ഉണ്ട്.

(മാങ്ങ , തേങ്ങ)

25) കുട്ടി ____ പറത്തി.

(പട്ടം , പൂവ്)

VI) വ്യഞ്ജനാക്ഷരങ്ങൾ എഴുതുക. (7)

26) ക ___ ഗ ___ ഒ
ച ___ ജ ___ ഞ
ട ___ ഡ ___ ണ
ത ___ ദ ___ ന
പ ___ ബ ___ മ

VII) പേര് എഴുതുക.

27) രണ്ട് നിറങ്ങളുടെ പേര് എഴുതുക. (2)

_____, _____

28) രണ്ട് പച്ചക്കറികളുടെ പേര് എഴുതുക. (2)

_____, _____

29) ചിറകുള്ള രണ്ട് ജീവികളുടെ പേര് എഴുതുക. (2)

_____, _____

29) നാല് കാലുള്ള രണ്ട് ജീവികളുടെ പേര് എഴുതുക. (2)

_____, _____

VIII) പദങ്ങൾ കണ്ടെത്തുക. (5)

വ	മ	ഉ
പാ	അ	ല
മ്മ	റ	രം

- 1)
- 2)
- 3)
- 4)
- 5)

ANNUAL EXAMINATION

STD: 1

HINDI

MARKS:50

- I. 1. WRITE VOWEL LETTERS. (5)
2. WRITE CONSONANT LETTERS. (8)
- II. WRITE ENGLISH MEANING. (6)
3. गाजर – (Pumpkin , Carrot)
4. गोभी - (Cauliflower , Onion)
5. मोर – (Peacock , Pigeon)
6. टमाटर – (Radish , Tomato)
7. घोडा – (Elephant , Horse)
8. बाघ – (Camel , Tiger)
- III. TICK THE CORRECT ANSWER. (6)
9. (सेब , अनार)



10. (गोभी , गाजर)



11. (अमरूद , पपीता)



12. (आलू, कद्दू)



13. (नाशपाती , अंगूर)



14. (पपीता , आम)



IV. MATCH THE NUMBERS WITH WORDS.

(5)

15. दस - 5

16. आठ - 7

17. पाँच - 3

18. सात - 10

19. तीन - 8

V. CHOOSE THE CORRECT ANSWERS. (6)

20. तोता (Peacock , Parrot)

21. बाज़ (Crane , Eagle)

22. चिड़िया (Sparrow , Crow)

23. सारस (Pigeon , Crane)

24. बतख (Duck , Crow)

25. कबूतर (Crane , Pigeon)

VI. FILL IN THE NUMBERS COMING AFTER. (5)

26. एक _

27. चार _

28. नौ _

29. दो _

30. छह _

VII. MATCH THE FOLLOWING. (5)

31. ऊँट - Cow

32. भैस - Monkey

33. हाथी - Camel

34. बंदर - Buffalo

35. गाय - Elephant

VIII. WRITE NEATLY THREE TIMES. (4)

36. कमल - __ , __ , __

37. जहाज - __ , __ , __

38. औरत - __ , __ , __

39. आम - __ , __ , __

_____ * _____ * _____ *

ANNUAL EXAMINATION 2023

STD :1

ENVIRONMENTAL STUDIES

MARKS:50

I CHOOSE THE CORRECT ANSWER FROM BRACKETS (7)

1. We go to (school / hospital) to study
2. (Fish / goat) live in water
3. Tree is a (big, / small) plant
4. All of us need (water / sweets) to live
5. We use an umbrella on a (rainy day / windy day)
6. When we look at the sky ,we see (the sun / the house)
7. We use water for (writing / bathing)

II MATCH THE FOLLOWING. (6)

- | | |
|---------------|-------------------------|
| 1. Drinking | a) hot |
| 2. Air. | b) a huge ball of fire |
| 3. Sunny Day. | c) water |
| 4. The Sun. | d) breathe |
| 5. Neem | e) insect |
| 6. Butterfly | f) tree |

III WRITE 'Yes' or 'No' (6)

- 1 A papaya has many seeds
- 2 A doctor works in a Police Station
- 3 We can see the sun at night
- 4 We can see air
- 5 A hippopotamus is a big animal
- 6 Dolphins live in water

IV CIRCLE THE ODD ONE OUT. (5)

1. Sun./ Moon. / Cat
2. Butterfly./ Lion./ Ant
3. Cool./ Snowmen./ Hot
4. Fish./ Monkey./ Birds
5. Drinking. / Cooking / Air

V GIVE AN EXAMPLE FOR EACH OF THE FOLLOWING (4)

1. Tree
2. Pet animal
3. Insect
4. Animal that live on tree

VI REARRANGE CAPITAL LETTERS TO MAKE WORDS. (4)

1. We need water to R K I D N –
2. We need water to K O O C –
3. We need R I A to breathe –
4. The N U S gives us heat and light –

VII ANSWER THE FOLLOWING (5x2=10)

1. Write two uses of water ?
- 2 What makes the blades of windmill turn ?

- 3 What do you like to drink on a hot day ?
- 4 When do we see the stars ?
- 5 Why do we need air ?

X CIRCLE THE THINGS THAT NEED AIR. (4)

Tree. Chair. Baby. Tiger. Pencil

X WRITE THESE WORDS IN THE CORRECT BOXES. (4)

(Lion. Cat. Monkey Goat. Elephant. Cow)

Wild Animals	Domestic Animals
--------------	------------------

ANNUAL EXAMINATION 2023-2024

CLASS: I

MATHEMATICS

MARKS.50

I.Fill in the blanks using correct options from the brackets. (8)

1.Taking away means -----
(addition , subtraction)

2. $5 \times 4 =$ -----
(20 , 30)

3.The long hand in a clock is the ----- hand.
(minute , hour)

4.There are ----- days in a week.
(6 , 7)

5.1 m = ----- cm
(100 , 200)

6.A rectangle has ----- sides.
(Four , Five)

7. ----- is the unit of weight.
(Kilogram , metre)

8. $40 + 10 =$ -----
(50 , 70)

II.Match the following. (6)

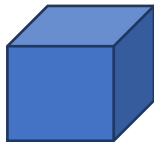
9.Cube -



10.Circle -



11.Square -



12.Rectangle -



13.Cylinder -



14.Triangle -



III . Add the following. (3)

15. a)
$$\begin{array}{r} 23 + \\ 31 \\ \hline \end{array}$$

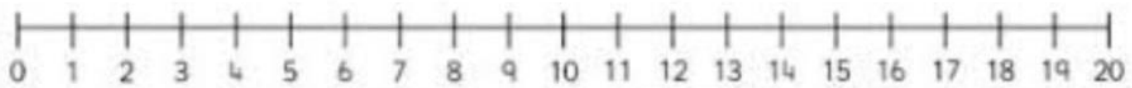
b)
$$\begin{array}{r} 46 + \\ 42 \\ \hline \end{array}$$

IV.Subtract the following. (3)

16. a)
$$\begin{array}{r} 45 - \\ 31 \\ \hline \end{array}$$

b)
$$\begin{array}{r} 76 - \\ 43 \\ \hline \end{array}$$

V.17)Add the numbers using number line (2)



$$6 + 6 = \square$$

VI.Skip count in 2s (2)

18. 2 , 4 , 6 , ----- , ----- , -----

VII.Write the time in two ways. (3)

19. (a)



VIII.Choose the correct options from the brackets (4)

20.Friday comes before
(Saturday , Sunday)

21.The month after May

(June , July)

22.The shortest Month

(March , February)

23.First month of the year

(January , April)

IX.Circle the correct units of the following

(2)

24.a) Kg / g

b) m / Km



c) mL / L


d) cm / m



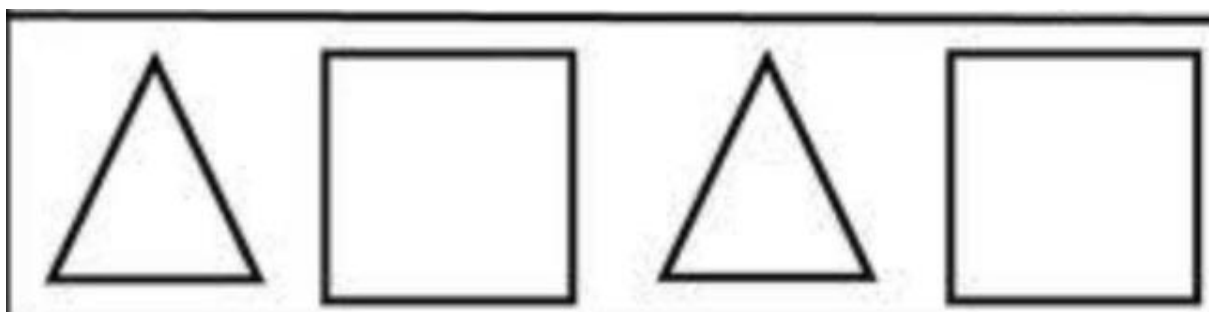
X.25.Complete the following patterns

(2)

a)



b)



XI. Write the following multiplication table

(10)

26. a) $1 \times 2 =$

$2 \times 2 =$

$3 \times 2 =$

$4 \times 2 =$

$5 \times 2 =$

$6 \times 2 =$

$7 \times 2 =$

$8 \times 2 =$

$9 \times 2 =$

$10 \times 2 =$

b) $1 \times 10 =$

$2 \times 10 =$

$3 \times 10 =$

$4 \times 10 =$

$5 \times 10 =$

$6 \times 10 =$

$7 \times 10 =$

$8 \times 10 =$


$9 \times 10 =$

$10 \times 10 =$






XII .27

(5)

Count the given fruits and find how many of each kind?



1) Complete the data table

				
strawberry	cherries	banana	pear	watermelon

ANNUAL EXAMINATION (2022-23)

CLASS-1

INFORMATION TECHNOLOGY

Marks- 50

NAME : _____ ROLL NO. _____ DIV. _____

I. CHOOSE THE CORRECT ANSWER FROM THE BRACKETS. (10x2=20)

1. There are _____ arrow keys on a keyboard. (Four/Five)
2. _____ is a drawing program. (Word pad / Tux paint)
3. _____ moves the cursor to the next line. (Enter key/Delete key)
4. _____ group has many shapes. (Shapes /Colour)
5. To draw a circle, we use the _____ tool. (Fill colour /Oval tool)
6. _____ key is used to type numbers. (Space bar /Number key)
7. _____ tool help us to erase a mistake in paint. (Eraser tool/Line tool)
8. We always keep the mouse on a _____. (Mouse pad/Keyboard)
9. _____ tool is used to fill in colours. (Fill with colour/ Shape tool)
10. _____ is an electronic machine. (TV /Table)

II. FILL IN THE MISSING LETTERS. (5x1=5)

11. TO _ _ L
12. OVA _ _
13. CO _ _ OUR
14. T _ _ XT
15. TITL _ _

III. WRITE THE NAME OF THE FOLLOWING COLOURS USING BRACKETS.(5x2=10)

[Black, Red, Green, Blue, Yellow]




16. _____ - _____




17. _____ - _____



18. _____ - _____



19. _____ - _____








20. _____ - _____

III. Write YES OR NO for the following statement. (4X1=4)

21. Oval tool is used to draw lines. _____
22. The paint program is used to draw and colour. _____
23. Computer is an electronic machine. _____
24. A keyboard has many keys on it. _____

IV. MATCH THE FOLLOWING SHAPES IN TO THEIR NAMES. (5X1=5)

25.  - **HEART**
26.  - **ARROW**
27.  - **LINE**
28.  - **STAR**
29.  - **TRIANGLE**

V. ANSWER THE FOLLOWING QUESTIONS.

30. What is a mouse used for? (1)

Ans. _____

31. Which key moves the cursor to the next line? (1)

Ans. _____

32. What is Tux Paint? (2)

Ans. _____

33. Write the four arrow keys. (2)

Ans. _____

ANNUAL EXAMINATION 2022-23

Std.1	GENERAL KNOWLEDGE	Marks 50
I.Tick the correct answer		(8)
1.Our national flower (sunflower, lotus)		
2.Our national game (hockey,cricket)		
3.Our national bird(parakeet, peacock)		
4.Our national animal (tiger, elephant)		
II Match the following		(5)
5.Bird. - Hive		
6.Spider - Pond		
7.Honeybee -Web		
8.Duck - Den		
9.Lion. – Nest		
III Write how many are there		(6)
10.A bicycle has ----- wheels.		
11.Two hands have----- fingers		
12.A week has----- days.		
13.A butterfly has----- wings		
14.An octopus has -----arms.		
15.A see saw has -----seats.		
IV.Circle the correct answer		(5)
16.Who grows food for us. cook/farmer		
17.What do you wear to school. Uniform / night suit.		
18.Which animal lives in water. Fish/ lion.		
19.How many months are there in a year. Seven /twelve.		
20.What is paneer made from. Apple /milk.		
V .Fill in the blanks with suitable answers.		(5)
21.The Red Panda is a----- animal (small, big)		
22.It has ----- fur. (green, red)		
23.Its tail is ----- . (long,short)		
24.It lives on ----- (house, trees)		

