

ALL SAINTS PUBLIC SCHOOL

HALF YEARLY EXAMINATION 2022 – 23


CLASS : UKG

MALAYALAM

MARK : 50

I. □□□□□□ □□□□□□□□□□□□ □□□□ (✓
) □□□□□□
□□□□. (3 x 2 = 6)

1. □□□□□ □□□ □□□ ?



2. □□□□□ □□□□□□ □□□ ?



3. □□□□□ □□ □□□ ?

V. □□□□□□□□□□

□□□□□□□□□□□□□□□□.

(4x2= 8)

1. □ ----- (□,)
(□,□)

3. □□-----□

2. □□ ----- (□,□)
(□,) VI. □□□□

4. □-----□

□□□□□□□□□□□□□□

□□□□□□□□□□ □□□□□□ □□□□

□□□□□□□□□□□□. (3x2=6)

□ ----- □ ----- □ -----

VII.

□□□□

□□□□□□□□□□□□□□□□

□□□□□□□□□□ □□□□□□□□

4

□□□□□□□□□□ □□□□□□□□. (4x2=8)

□	□	□	□
	□	□	□
□	□	□	□
□	□	□	□□

ALLSAINT'S PUBLIC SCHOOL CHAYAM VITHURA

Annual Examination 2022-2023

UKG ENGLISH

Name:..... Class:senior Kg Time 2hr

Section:.....Roll number..... Marks :50

1.Fill in the blanks with on or in

(Marks 4)

- A book is..... the table
- A dress is.....the cupboard
- A pen is..... the box



- A bug is..... the leaf

82.write A to Z in cursive

(marks 10)

3.circle the correct word

(Marks6)



CAT MAT FAT



FREE SEE BEE



FAN MAN VAN



LOOM FAN ROOM



SUN FAN MOON



SHEEP TREE SEE

4. use in front of or behind

(Marks 2)



*The house is----- the tree



* The boy is----- the girl

5. Use under or near

(Marks 4)



The boy is ----- the tree



The cat is-----dog



The dog is----- table



The bear is----- the pond

6. My Self

(Marks 2)

My name is _____
I am ___ year old

7. Write yes or no

(Marks 6)

Is this a house



.....

Is this a rose



.....

Is this a duck



.....

Is this a mango



.....

Is this a sun



.....


Is this a dog



.....

8. Match the following with action words

(Marks 5)



HELPING



QUARRELING



WAVING



CLAPPING



CRAWLING

9. write These/Those

(Marks 6)

_____ are cakes



_____ are mangos




_____ are dogs



_____ are clocks



_____ are cats




_____ are animals



10. join the dots A to Z and colour the picture

(marks 5)



ANNUAL EXAMINATION

HINDI

CLASS UKG

MARK. 50

1. गीला लगाइए (20)

1. अ : इ अ उ
2. इ : उ इ अ
3. ः : उ इ ः
4. ए : ओ ऐ ए
5. अं : अं अ ओ
6. आ : इ आ उ
7. उ : इ उ ऊ
8. ऐ : इ ऐ उ
9. ऊ : उ ऊ ए
10. ई : ई ऊ इ

2) सुंदर अक्षरों में लिखिए (20)

अ आ इ ई उ ऊ ः

3) रिक्त स्थानों की पूर्ति कीजिए (10)

- 1) अ _ इ _ _ _ ः

ALL SAINTS PUBLIC SCHOOL CHAYAM VITHURA

ANNUAL EXAMINATION - 2023

MATHEMATICS

UKG

MARKS :50

I. WRITE THE MISSING NUMBERS.

(2)

71 _ _ _ _ _ 80 .

II. COUNT AND WRITE THE CORRECT NUMBER .

(2)



III. PUT THE CORRECT SYMBOL. (> , < , =)

(4)

a. 20

15

c. 44

45

b. 17

12

d. 33

39

IV. WRITE THE NUMBERS FROM 30 to 21 DESCENDING ORDER(4)

30 29 _ _ _ _ _ 21

V. SUBTRACT THE FOLLOWING NUMBERS.

(4)

a. $3 - 2 = \underline{\quad}$.

c. $2 - 1 = \underline{\quad}$.

b. $7 - 5 = \underline{\quad}$.

d. $4 - 3 = \underline{\quad}$.

VI. COMPLETE THE PATTERN.

(4)



a.

,

,



,

_____.

b.

,



,



,

_____.

VII. WRITE THE NUMBER NAMES.

(8)

a. 63 _____


b. 71 _____

c. 50 _____

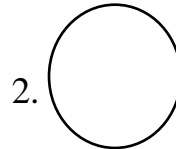
d. 46 _____

VIII. COLOUR THE FOURTH CIRCLE.

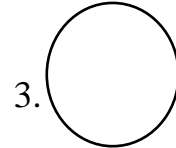
(2)




1.



2.



3.



4.

IX. ARRANGE THE NUMBERS IN ORDER.

(5)

10, 8, 7, 12, 15

_____.

X. WRITE THE NUMBERS FROM 81 – 100.


(5)

81 _____ 90

91 _____ 100

XI. NAME THE FOLLOWING . (2)

(circle , square , triangle).



_____ .



_____ .

XII. WRITE THE NUMBER THAT COMES BEFORE (4)

(a) _____ 13

(b) _____ 26

(c) _____ 40

(d) _____ 35

XIII. WRITE THE NUMBER THAT COMES AFTER (4)

(a) 10 _____ (b) 8 _____

(c) 36 _____ (d) 29 _____

ALL SAINTS PUBLIC SCHOOL CHAYAM VITHURA

ANNUAL EXAM 2023- ENVIRONMENTAL STUDIES

CLASS:- UKG

MARKS:50

NAME:-_____

SECTION:-_____

1.Fill in the blanks with their young ones

(10)

1. Dog : -----

2. Lion : -----

3.cow : -----

4.hen : -----

5.duck :-----

(Duckling, calf, puppy, cub, chick)

2. Lion lives in -----

(6)

Fish lives in -----


Monkey lives in -----

(Tree, water, den)

3. Write 'L' if the means of transport is used to travel on land, 'A' if it is used to move in air,

'W' if it used to move in water

(7)





.....

4. Match the animals with their sounds?

(5)

Dog

mew

Lion

bark

Duck

roar

Cat

hiss

Snake

quack

doctor
carpenter

farmer
hairdresser

nurse
postman

tailor
policeman

5. Write the names of the people who help us (8)

5. Write any 2 uses of water (4)

6. Answer the following questions? (10)

1. Which is our national animal?

2. Which is our national bird?

3. Which is our national tree?

4. Which is our national fruit?

5. Which is our national flower?